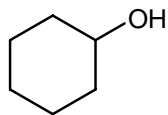
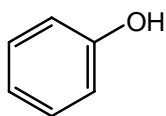


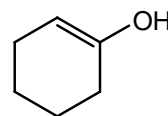
Chapter 02 Worksheet 01

Rank the following in order of increasing acidity (1 = lowest, 3 = highest)

1.







2.







3.







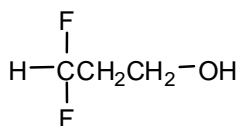
4.

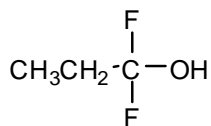


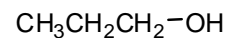




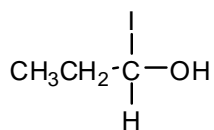
5.

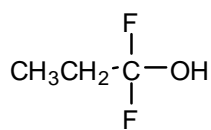


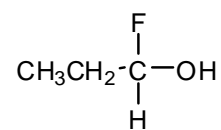




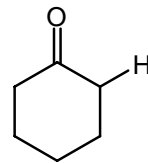
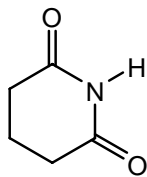
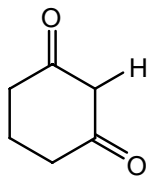
6.







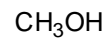
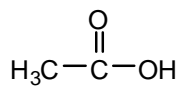
7.



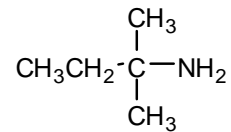
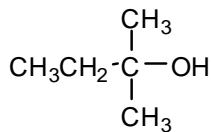
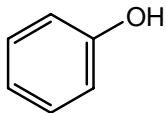
8.



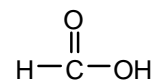
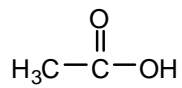
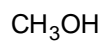
9.



10.



11.



Rank the following in order of increasing basicity (1 = lowest, 3 = highest)

12.



13.



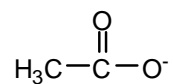
14.



15.



16.



17.

