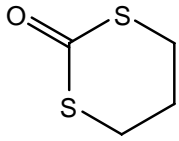


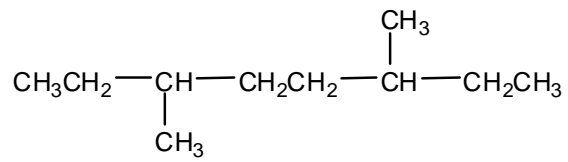
## Chapter 14 Quiz 01

Determine the number of non-equivalent hydrogens and label each set (a,b,c, etc.) in the compounds below.

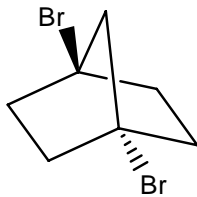
1.



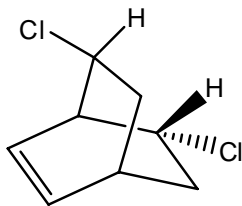
2.



3.



4.



5.

