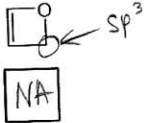


A > NA > AA

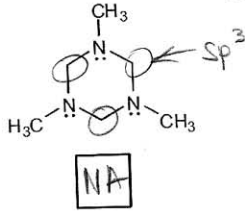
Chapter 16 Quiz 01

Facts: Classify the following compounds as aromatic (A), antiaromatic (AA), or nonaromatic (NA).

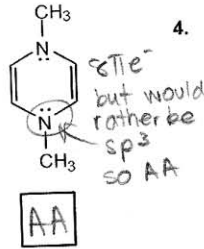
1.



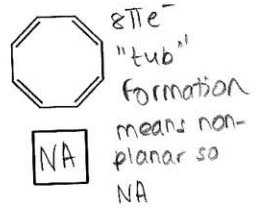
2.



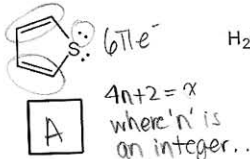
3.



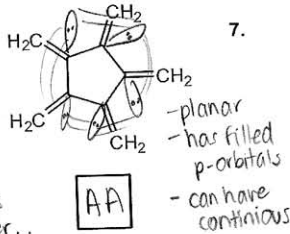
4.



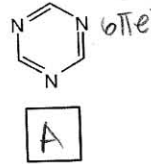
5.



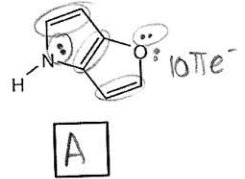
6.



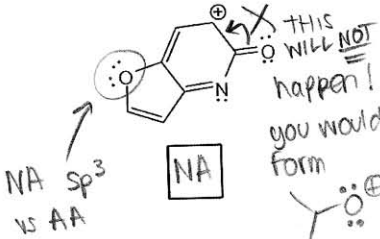
7.



8.



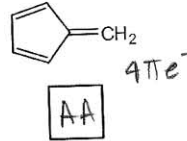
9.



10.



11.



12.

