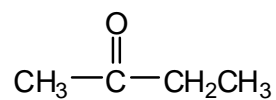


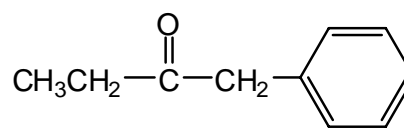
## Chapter 18 Worksheet 01

**Nomenclature:** Give an acceptable IUPAC name for each of the following compounds. Be sure to indicate the stereochemistry where appropriate.

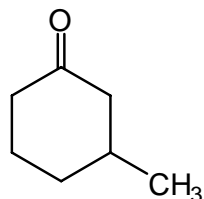
1.



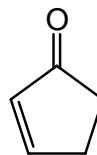
2.



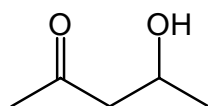
3.



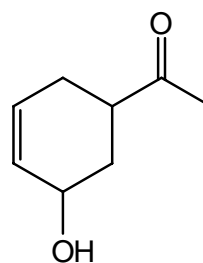
4.



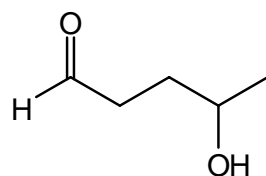
5.



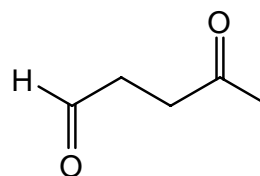
6.



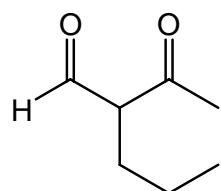
7.



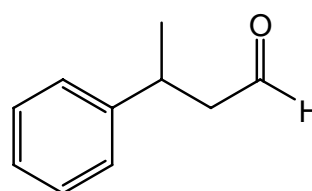
8.



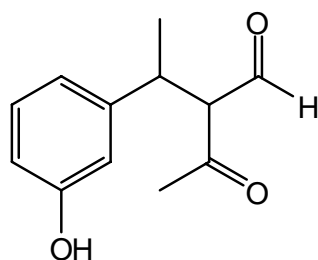
9.



10.



11.



12.

